

# O. P. JINDAL SCHOOL, SAVITRI NAGAR

Periodic Test -1(Round - 3)(2025 – 2026)

Class / Section: I ( )

MM: 20

Subject: Mathematics

Time: 1Hr.

Name: \_\_\_\_\_ Roll No.: \_\_\_\_\_

Invigilator's Sign: \_\_\_\_\_ Marks Obtained: \_\_\_\_\_ Examiner's Sign: \_\_\_\_\_

**1) Write down the missing numbers.**

**(4 Marks)**

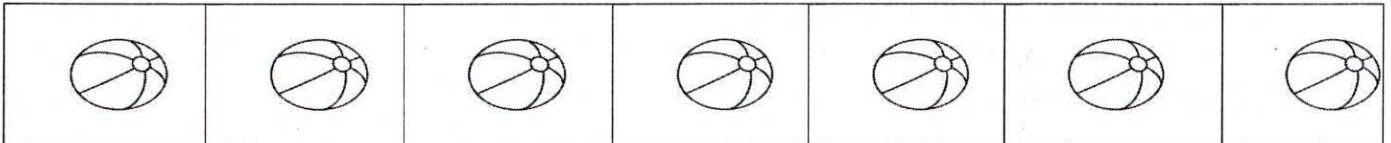
i) \_\_\_\_\_ 6 \_\_\_\_\_ 8

ii) \_\_\_\_\_ 2 \_\_\_\_\_ 4, 5

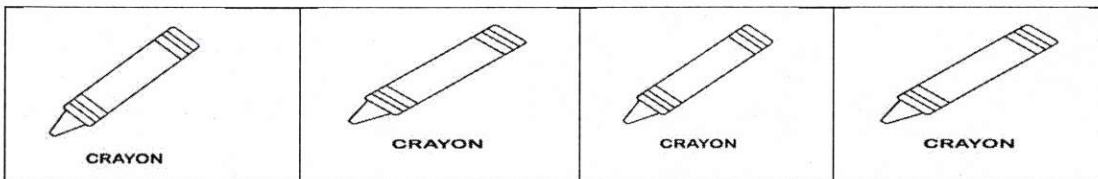
**2) Count and Colour.**

**(3 Marks)**


i) Colour 6 balls



ii) Colour 2 crayons



iii) Colour 3 mangoes



3) Draw a path from numbers 1 to 9 in the correct order. The lines should not cross each other. (2 Marks)


1	3	4
9	2	5
8	7	6

4) Arrange the numbers smallest to biggest. (2 Marks)

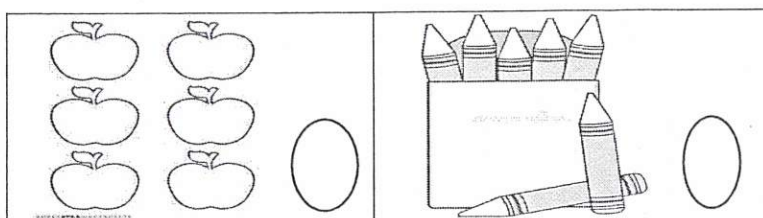
3, 5, 8, 7 → \_\_\_\_\_

5) Tick (✓) The correct answers. (2 Marks)

i) Which is more number


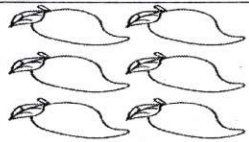




ii) Which is less number



6) Count and match.

(4 Marks)

	Six
	Nine
	Four
	Three

7) Circle the biggest number.


(2 Marks)

i) 6, 7, 5, 9

ii) 3, 4, 2, 8

8) Colour the smallest number.

( 1 Mark)



\*\*\*\*\*